

DOWNLOAD PDF DOCUMENT



EXPLORING SPECIAL RIGHT...

DOWNLOAD DOCUMENT NOW

Updated: 10/12/2017

DISCLAIMER:

CHAUVIN.CO uses the following exploring special right triangles tesccc key book available for free PDF download which is also related with

EXPLORING SPECIAL RIGHT TRIANGLES TESCCC KEY

There are cases when you need exploring special right triangles tesccc key instantly and have no site to download it from. We can provide you for an opportunity to get as many eBooks as you need and all for free. We offer an access to a rich collection of files in PDF format that are easy to download. You don't need to pay either for exploring special right triangles tesccc key or other books. This is a unique opportunity. We ask you to pass a registration by following the link and answering simple questions. Then you will get an access to exploring special right triangles tesccc key and can download this file and other data without paying for it. We ask you to pass the registration because of endless hackers' attacks that deface our website. When you register, you get a unique access to exploring special right triangles tesccc key and other files, so that bots cannot do harm. So, if you need exploring special right triangles tesccc key right now, you will get it after simple registration.

DOWNLOAD NOW

DOWNLOAD PDF DOCUMENT

DOWNLOAD PDF DOCUMENT

EXPLORING SPECIAL RIGHT...

[LESSON 3 SPECIAL RIGHT TRIANGLES.NOTEBOOK](#)

Lesson3SpecialRightTriangles.notebook October03,2013 1 Lesson3SpecialRightTriangles.notebook October03,2013 2 ...

File name: Lesson 3 Special Right Triangles 30 60 90.pdf

[Download now or Read Online](#)

[MICROSOFT WORD - 7.3 WS.DOC](#)

Geometry Survey Name: 7.3 Worksheet Period: Special Right Triangles: 30 - 60 - 90Hypotenuse = 2 * Short LegLong Leg = Short Leg *Find the value of x and y in each triangle.1. 2. 3.4. 5. 6.7. 8. 9.Sketch the figure that is described. Then, find the requested measure.10. An equilateral triangle has a side length of 10 inches. Find the length of the triangles altitude.11. The altitude of an equilater...

File name: Special Right Triangles.pdf

[Download now or Read Online](#)

[GEOMETRY TEST ANSWERS KEY CURRICULUM PRESS](#)

Geometry Test Answers Key Curriculum Press pdfDOWNLOAD HEREDiscovering Geometry An Investigative Approachhttp cms cerritos edu uploads mallen Math 20070 20Worksheets DGPSA Ans pdf2008 Key Curriculum Press ANSWERS DG4PSA 894 ans qxd 11 1 06 10 37 AM Page 91 92 ANSWERS Discovering GeometryPractice Your Skills 2008 Key Curriculum PressPractice Your Skills with Answers - South Dade Senior Highhttp sds...

File name:

[Download now or Read Online](#)

[GEOMETRY FORM G KEY](#)

Free PDF eBook DownloadGeometry Form G KeyDownload or Read Online eBook geometry form g key in PDF Format From The Best User Guide Database1 Foster Partners Geometry Form and Complexity Research Development Specialist Modelling Group Is geometrythe essence of form or just a Aug 10 2009 - RELEASED FORM Geometry Form H Carolina Test of Geometry Form HRELEASED Fall 2009 Page 1 Item Number Correct Ans...

File name:





















[Download now or Read Online](#)

DOWNLOAD PDF DOCUMENT

DOWNLOAD PDF DOCUMENT

Here below another book similar with:

EXPLORING SPECIAL RIGHT...

-  [exploring special right triangles tesccc key](#)
-  [quiz for solving special right triangles](#)
-  [perimeter and area using special right triangles](#)
-  [geometry right triangles and trigonometry test packet](#)
-  [the right words right and wrong book 1](#)
-  [tesccc precalculus answer key](#)
-  [similar polygons and triangles answer key](#)
-  [tesccc chemistry unit 9 lesson 1](#)
-  [tesccc writing and naming ionic compounds answers](#)
-  [2010 tesccc algebra 2 answers](#)
-  [tesccc more practice with gas laws answers](#)
-  [tesccc quadratic and exponential](#)
-  [2012 tesccc geometry unit 02](#)
-  [exploring creation with biology test answer key](#)
-  [math ncert similarity of triangles solutions](#)
-  [regiomontanus on triangles](#)
-  [white plains ratio and proportion similar triangles](#)
-  [performance tasks congruent triangles](#)
-  [test missing angles quadrilateral triangles](#)
-  [mathswatch angle sum of triangles](#)

DOWNLOAD PDF DOCUMENT